



BETTER EDUCATIONAL CONSULTANCY

PRE-PRIMARY LEAVING EXAMINATION

SET TWO, 2022

SOCIAL STUDIES

Time Allowed: 2 hours 15 minutes

Index No.

Random No.						Personal No.		

Candidate's Name:

Candidate's Signature:

School Random No.

District ID:

Read the following instructions carefully:

1. Do not write your **school** of **district** name anywhere on this paper.
2. This paper has two sections: **A** and **B**.
Section **A** has **40** questions and section **B** has **15** questions.
3. Answer **all** questions. **All** answers to both sections **A** and **B** must be written in the spaces provided.
4. All answers **must** be written using a **blue** or **black** ball point pen or ink. Any work written in pencil will **not** be marked.
5. Unnecessary **changes** in your work and handwriting that cannot be easily read may lead to **loss of marks**.
6. Do not fill anything in the table indicated: **"for examiner's use only"** and boxes inside the question paper.

FOR EXAMINER'S USE ONLY

Qn. No	MARK	EXR'S NO.
1 – 10		
11 – 20		
21 – 30		
31 – 40		
41 – 43		
44 – 46		
47 – 49		
50 – 52		
53 – 55		
TOTAL		

SECTION A

1. Name the cash crop that was introduced by the Arabs in Zanzibar.

2. Mention the tsetse fly infested savannah woodlands of Tanzania.

3. Why is it important to have regular elections in the country?

4. How do waterfalls support the development of industries in a country?

5. Mention one economic challenge affecting the Multi-purpose River Projects in Africa.

6. Which area was the cradle land of the Acholi?

7. Give the animal that the tourists go to see at Ngamba Island.

8. Mention any one example of basic technology taught in primary schools.

9. How are active volcanoes dangerous in an area?

10. State one way the government can discourage rural- Urban migration.

11. Give one example of good behaviour expected of a good citizen.

12. Why are national symbols important to a country?

13. State any one reason why Uganda trades with other countries.

14. Why did Sir Hesketh Bell encourage cotton growing in Uganda?

15. How has Covid 19 pandemic affected the Education sector in Uganda?

16. Give one reason why the Fulani of Nigeria practice transhumance.

17. Which river forms a political boundary between Tanzania and Mozambique?

18. How can rural – electrification contribute to environmental conservation?

19. In which way do the Harmattan winds influence the climate of West Africa?

20. Give one reason why the Arabs wanted slave trade to continue in E. Africa.

21. How can a large population be an advantage to a country like Uganda?

22. Why is it important to build a fence around the school?

23. What role did Bishop Desmond Tutu play towards the end of apartheid policy in South Africa?

24. State one reason why the Portuguese conquered the coast of East Africa.

25. How does the Niger Delta promote the economic development of Nigeria?

26. What is a **homestead**?

27. How can the Government of Uganda control the rate of Brain drain in the country?

Study the chart below showing the weather recorded in the third week of July, and answer questions (28 - 30)

Days	Sunday	Monday	Tuesday	Wednesday	Thursday	Friday	Saturday
Weather	Cloudy	Rainy	Rainy	Sunny	Windy	Sunny	Humid

28. Name one day when farmers dried their harvested crops.

29. On which day did meteorologists use a Wind vane to record weather?

30. Which element of weather was recorded on Monday and Tuesday?

31. Name the tools the security team uses to maintain security in our school?

32. What time will it be at place Q, 45° East, if it is 11:30 am at Greenwich Meridian?

33. Why do the Karimojongs practice tattooing?

34. Name the line of longitude which is used to determine the date.

35. State one factor that enables crocodiles to live in Murchison falls National Park

In questions 36 – 40 answer Either Christianity or Islam but not both.

36. **Either:** Name the first people to see Jesus after His birth.

Or: Name the first Muslim to be converted by prophet Muhammad.

37. **Either:** Why is Mt. Sinai important in Christianity?

Or: Why is Mt Hira important in Islam.

38. **Either:** Name the apostle who fought the soldiers that had come arrest Jesus.

Or: Name the caliph who travelled together with prophet Muhammad during the Hegira.

39. **Either:** Why was baby Jesus rushed to Egypt just after His birth?

Or: Why did Prophet Muhammad migrate from Makkah to Medina?

40. **Either:** Which important event marks the end of lent.

Or: Which important event marks the end of Ramathan.

SECTION B

41. (a) Name the governor who exiled Kabaka Edward Fredrick Muteesa II.

(b) Give one reason why Kabaka Edward Fredrick Muteesa II was exiled.

c) Give two ways in which Africans reacted towards colonial administration.

(i) _____

(ii) _____

42.a) Name one European company which promoted colonial interests in East Africa.

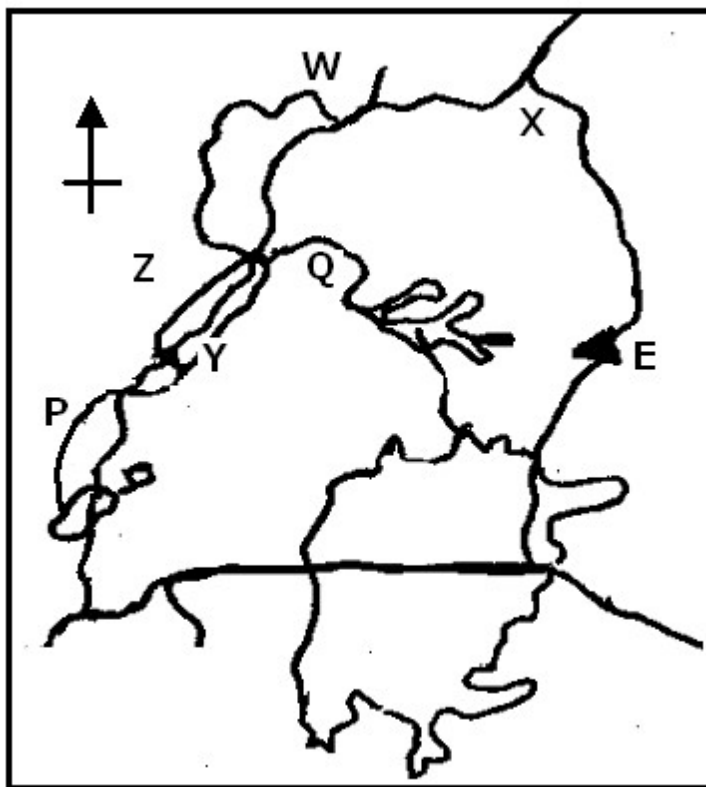
b) State any one activity that was performed by the company above.

c) Mention two problems which were faced by the company while carrying out its work.

(i) _____

(ii) _____

43. Study the map of Uganda below and answer the questions that follow.



(a) Name the river marked P.

(b) Give one reason why navigation is difficult on the part of the Nile marked Q.

(c) What is the direction of X from Y?

(d) State the type of mountain marked with letter E.

44. a) Name any two leaders that participated in the revival of the present East African Community.

(i) _____

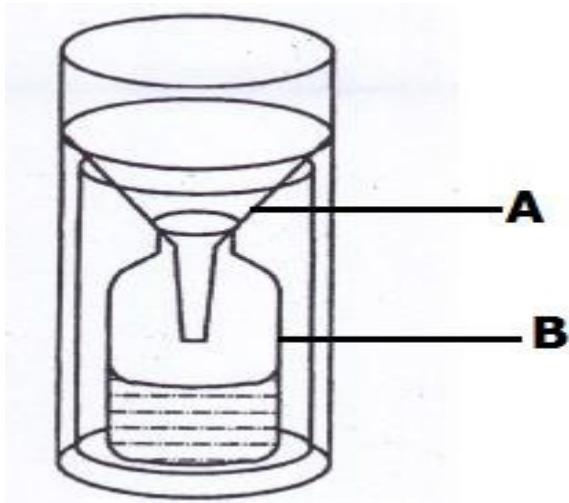
(ii) _____

b) Give any two reasons for the revival of the East African Community.

(i) _____

(ii) _____

45. Study the diagram below and answer the questions that follow



(a) Name the instrument shown above.

_____ (b) Name the parts

marked A and B.

(i) A: _____

(ii) B: _____

(iii) (c) Why is the instrument above placed in an open flat area?

46. (a) Mention two inland ports that handle Uganda's exports and imports on Lake Victoria.

(i) _____

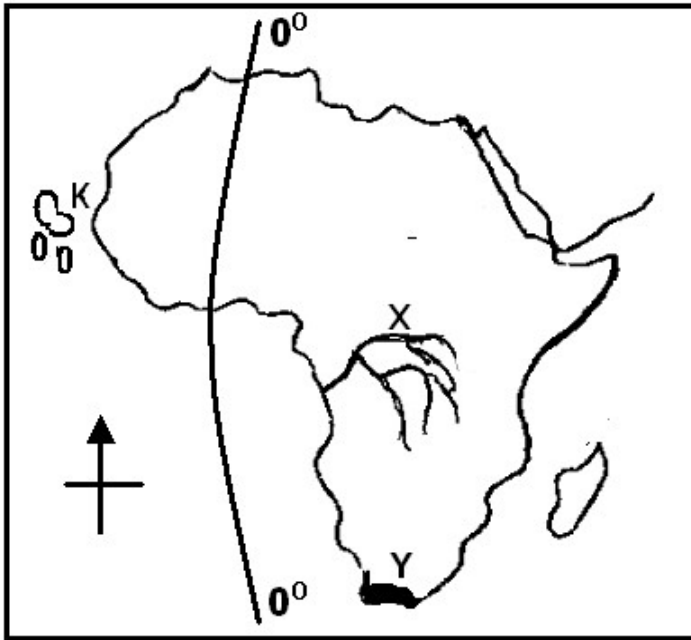
(ii) _____

(b) Give two disadvantages land locked countries face during exportation and importation of their goods.

(i) _____

(ii) _____

47. Use the map of Africa below to answer the questions that follow.



(a) What name did the King of Portugal give to the place marked Y after Bartholomew had reached there?

(b) Name the Island country marked K

(c) Name the imaginary line mark 0°

(d) Name the river marked with letter x.

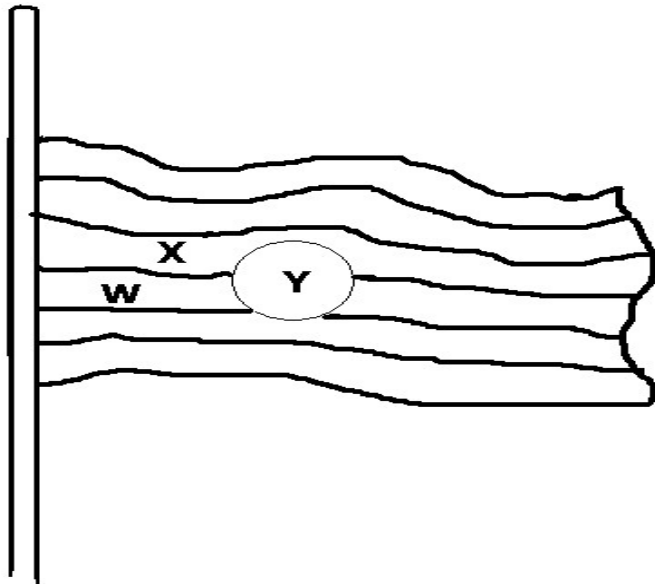
48(a) Which European explorer started to look for the source of the Nile from its delta?

(b) Why did most European explorers who came to Uganda travel through Tanzania but not Kenya?

(c) Name the European explorer who died at the Bussa falls on R. Niger.

(d) Mention one danger that the early European travellers faced in East Africa.

49. The diagram below shows the Uganda National Flag. Use it to answer the questions that follow.



(a) Name the colour marked W

(b) What does the colour marked X stand for?

(c) When is the flag above flown as shown above?

(d) Which symbol of Uganda as a nation is found at the place marked Y.

50(a) Mention two factors that are responsible for different vegetation zones in Africa.

(i) _____

(ii) _____

(b) State one way in which forests reduce the effect of global warming in an area.

c) How can the Government of Uganda protect the existing forests in Uganda?

For questions 51 – 55, answer either Christianity or Islamic but Not both.

51. **Either:** (a) Mention two reasons why Jesus performed miracles.

(i) _____

(ii) _____

(b) How did Jesus help the following people?

(i) The sick: _____

(ii) The hungry: _____

Or: a) State two reasons why Prophet Isa performed miracles.

(i) _____

(ii) _____

(b) How did Prophet Isa help the following people?

(i) The sick _____

(ii) The hungry _____

52. **Either:** (a) Give two ways in which Jesus served his parents.

(i) _____

(ii) _____

(b) Give one way Christian children follow the example of Jesus.

(c) What lesson do we learn from Jesus service for his parents?

Or: a) Give two ways in which Prophet Muhammad served his Guardians.

i) _____

ii) _____

(b) Give one way moslem children follow prophet Muhammad.

(c) Give one way Muslim children follow the example of Prophet Muhammad.

(d) What lesson do we learn from Muhammad's service to his uncle?

53. **Either:** a) State any two ways Abraham demonstrated his faith to God.

(i) _____

(ii) _____

b) Name the only son of Abraham that he accepted to sacrifice to God.

d) Give the brother of Esau who stole Esau's blessings.

Or: a) Mention two ways prophet Ibrahim showed his faith to Allah.

(i) _____

(ii) _____

b) Name the son of prophet Ibrahim that he wanted to sacrifice to Allah.

c) Who was the first Caliph of Prophet Mohammed?

54. **Either:** a) Mention the two people who committed the original sin.

(i) _____

(ii) _____

(b) What immediate punishment did God give to the people in (a) above?

(c) How can we overcome temptation?

Or: (a) Mention the two people who committed the original sin.

(i) _____

(ii) _____

(b) What immediate punishment did Allah give to the people in (a) above?

(c) How can we overcome temptation?

55. **Either:** a) What is a talent?

(b) Name two special talents Christians have.

(i) _____

(ii) _____

(c) Mention one way Christians use their special talents in worship.

Or: (a) Name the source of special talents of Muslims.

(b) Name two special talents Muslims have.

(i) _____

(ii) _____

(c) Mention one way Muslims use their special talents in worship and service.
